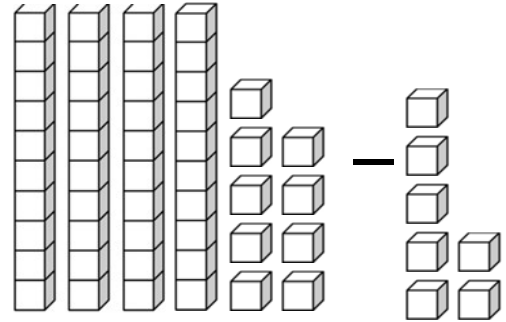
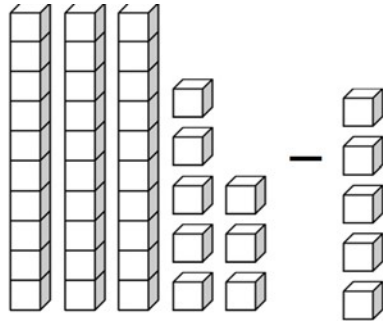




Subtrahieren von 1-stelligen Zahlen ohne Übertrag

A. Zähle die Anzahl der Blöcke. Fülle die Lücken aus.



$$38 - 5 = \underline{\quad}$$

$$\underline{\quad} - \underline{\quad} = \underline{\quad}$$



B. Löse die Subtraktionsaufgaben.

$$\begin{array}{r} 58 \\ - 7 \\ \hline \end{array}$$

$$\begin{array}{r} 19 \\ - 4 \\ \hline \end{array}$$

$$\begin{array}{r} 68 \\ - 2 \\ \hline \end{array}$$

$$\begin{array}{r} 19 \\ - 3 \\ \hline \end{array}$$

$$\begin{array}{r} 47 \\ - 1 \\ \hline \end{array}$$

$$\begin{array}{r} 36 \\ - 4 \\ \hline \end{array}$$

$$\begin{array}{r} 57 \\ - 4 \\ \hline \end{array}$$

$$\begin{array}{r} 78 \\ - 5 \\ \hline \end{array}$$

$$\begin{array}{r} 39 \\ - 9 \\ \hline \end{array}$$

$$\begin{array}{r} 65 \\ - 3 \\ \hline \end{array}$$

$$\begin{array}{r} 29 \\ - 2 \\ \hline \end{array}$$

$$\begin{array}{r} 78 \\ - 6 \\ \hline \end{array}$$

$$\begin{array}{r} 29 \\ - 6 \\ \hline \end{array}$$

$$\begin{array}{r} 47 \\ - 2 \\ \hline \end{array}$$

$$\begin{array}{r} 98 \\ - 4 \\ \hline \end{array}$$

$$\begin{array}{r} 87 \\ - 3 \\ \hline \end{array}$$

$$\begin{array}{r} 28 \\ - 0 \\ \hline \end{array}$$

$$\begin{array}{r} 13 \\ - 3 \\ \hline \end{array}$$