



# Lerne eine Mal-Reihe: 3 x 5

$$3 \times 5 = 15$$



**Drei Aquarien**

$$3 \times 5 = 15$$



**3 Aquarien**

**5 Fische in jedem**

---


**3 Gruppen von Fischen**

$$3 + 3 + 3 + 3 + 3 = 15$$


**15 Fische insgesamt**

Mathe 3

5



5




5




$$3 \times 5 = 15 \quad 5 \times 3 = 15$$

3




3



3



3



3

