



# Lerne eine Mal-Reihe: 2 x 9

$$2 \times 9 = 18$$



Zwei Aquarien

$$2 \times 9 = 18$$



2 Aquarien

9 Fische in jedem

---

2 Gruppen von Fischen

$$9 + 9 = 18$$

18 Fische insgesamt

Mathe 3

9



9




$$2 \times 9 = 18 \quad 9 \times 2 = 18$$


2




2




2




2




2



2



2



2

