




Lerne eine Mal-Reihe: 2 x 5

$$2 \times 5 = 10$$



Zwei Aquarien

$$2 \times 5 = 10$$



2 Aquarien

5 Fische in jedem


2 Gruppen von Fischen

$$5 + 5 = 10$$

10 Fische insgesamt

Mathe 3

5




5




$$2 \times 5 = 10 \quad 5 \times 2 = 10$$


2




2



2



2



2

