


Lerne eine Mal-Reihe: 6 x 9

$$9 \times 6 = 54$$



sechs Aquarien

$$6 \times 9 = 54 \quad 9 \times 6 = 54$$




9 Fische in jedem

6 Gruppen von Fischen


$$6 + 6 + 6 + 6 + 6 + 6 + 6 + 6 = 54$$

54 Fische insgesamt

9



9




9



9



9



9




$6 \times 9 = 54$ $9 \times 6 = 54$


6



6




6



6




6




6



6



6



6

