


Lerne eine Mal-Reihe: 6 x 8

$$8 \times 6 = 48$$



sechs Aquarien

$$6 \times 8 = 48 \quad 8 \times 6 = 48$$




8 Fische in jedem

6 Gruppen von Fischen


$$6 + 6 + 6 + 6 + 6 + 6 + 6 + 6 = 48$$

48 Fische insgesamt

8



8




8



8



8



8




$6 \times 8 = 48$ $8 \times 6 = 48$

6



6




6




6




6



6



6



6

