


# Lerne eine Mal-Reihe: 6 x 7

$$7 \times 6 = 36$$



sieben Aquarien

$$6 \times 7 = 36 \quad 7 \times 6 = 36$$



7 Fische in jedem

---

6 Gruppen von Fischen


$$6 + 6 + 6 + 6 + 6 + 6 = 42$$

42 Fische insgesamt


7




7




7



7



7



7




$6 \times 7 = 36$     $7 \times 6 = 36$


6



6




6



6



6



6



6

