

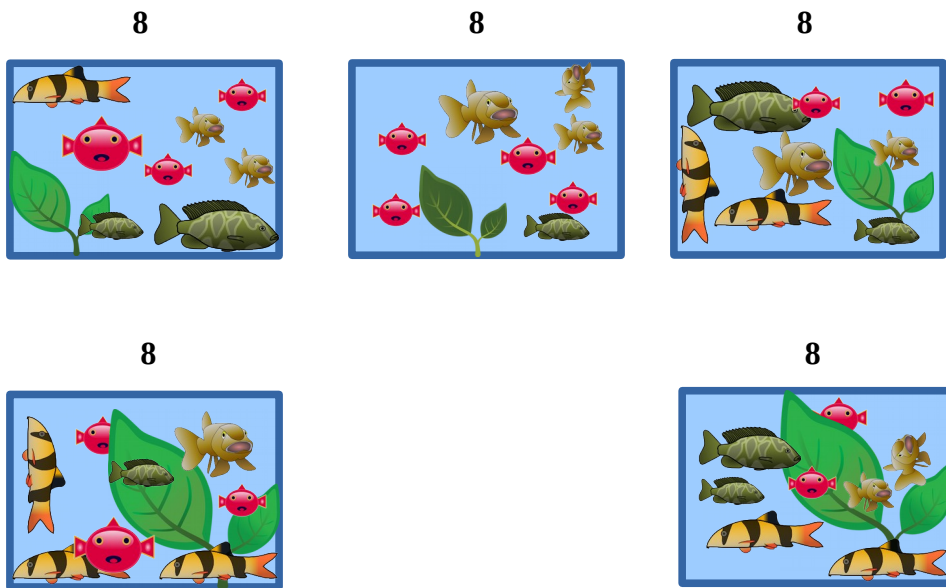
Lerne eine Mal-Reihe: 5 x 8

$$5 \times 8 = 40$$



Fünf Aquarien

$$5 \times 8 = 40 \quad 8 \times 5 = 40$$




8 Fische in jedem

5 Gruppen von Fischen

$$8 + 8 + 8 + 8 + 8 = 40$$

40 Fische insgesamt

8



8



8



8




8




$5 \times 8 = 40$ $8 \times 5 = 40$

5



5




5



5




5



5



5



5

