



Lerne eine Mal-Reihe: 5 x 7

$$7 \times 5 = 35$$



fünf Aquarien

$$7 \times 5 = 35 \quad 5 \times 7 = 35$$




5 Fische in jedem

5 Gruppen von Fischen

$$7 + 7 + 7 + 7 + 7 = 35$$

35 Fische insgesamt


7



7



7



7




7




$5 \times 7 = 35$ $7 \times 5 = 35$

5



5




5




5



5



5



5

