


Lerne eine Mal-Reihe: 5 x 6

$$6 \times 5 = 30$$



sechs Aquarien

$$6 \times 5 = 30 \quad 5 \times 6 = 30$$




5 Fische in jedem

6 Gruppen von Fischen


$$6 + 6 + 6 + 6 + 6 = 30$$

30 Fische insgesamt

5



5




5



5



5




5



$6 \times 5 = 30$ $5 \times 6 = 30$


6



6



6



6



6

