


Lerne eine Mal-Reihe: 4 x 9

$$4 \times 9 = 36$$



Vier Aquarien

$$4 \times 9 = 36$$



4 Aquarien


9 Fische in jedem

4 Gruppen von Fischen


$$9 + 9 + 9 + 9 = 36$$

36 Fische insgesamt


9




9



9




9



$4 \times 9 = 36$ $9 \times 4 = 36$

4



4




4




4




4



4



4



4

