


# Lerne eine Mal-Reihe: 4 x 8

$$4 \times 8 = 32$$



Vier Aquarien

$$4 \times 8 = 32$$



4 Aquarien

8 Fische in jedem


---

4 Gruppen von Fischen


$$8 + 8 + 8 + 8 = 32$$

32 Fische insgesamt


8




8



8




8




$4 \times 8 = 32$     $8 \times 4 = 32$

4




4




4




4




4



4



4



4

