



# Lerne eine Mal-Reihe: 4 x 7

$$4 \times 7 = 28$$



Vier Aquarien

$$4 \times 7 = 28$$



4 Aquarien





7 Fische in jedem

---

4 Gruppen von Fischen

$$7 + 7 + 7 + 7 = 28$$

28 Fische insgesamt



$4 \times 7 = 28$     $7 \times 4 = 28$

