


Lerne eine Mal-Reihe: 4 x 6

$$4 \times 6 = 24$$



Vier Aquarien

$$4 \times 6 = 24$$



4 Aquarien

6 Fische in jedem

4 Gruppen von Fischen


$$6 + 6 + 6 + 6 = 24$$

24 Fische insgesamt

6




6



6




6




$4 \times 6 = 24$ $6 \times 4 = 24$


4




4




4



4



4



4

