


# Lerne eine Mal-Reihe: 4 x 5

$$4 \times 5 = 20$$



Vier Aquarien

$$4 \times 5 = 20$$



4 Aquarien

5 Fische in jedem

---

4 Gruppen von Fischen


$$5 + 5 + 5 + 5 = 20$$

20 Fische insgesamt

5



5



5




5




$4 \times 5 = 20$     $5 \times 4 = 20$

4




4



4



4



4

