


Lerne eine Mal-Reihe: 3 x 8

$$3 \times 8 = 24$$



Drei Aquarien

$$3 \times 8 = 24$$



3 Aquarien

8 Fische in jedem

3 Gruppen von Fischen

$$3 + 3 + 3 + 3 + 3 + 3 + 3 + 3 = 24$$

24 Fische insgesamt

Mathe 3

8



8



8




$$3 \times 8 = 24 \quad 8 \times 3 = 24$$


4




4




4



4




4



4



4



4

