


Lerne eine Mal-Reihe: 3 x 7

$$3 \times 7 = 21$$



Drei Aquarien

$$3 \times 7 = 21$$



3 Aquarien

7 Fische in jedem

3 Gruppen von Fischen

$$3 + 3 + 3 + 3 + 3 + 3 + 3 = 21$$

21 Fische insgesamt

7



7




7



$3 \times 7 = 21$ $7 \times 3 = 21$

3




3




3



3



3



3



3

