



Lerne eine Mal-Reihe: 2 x 8

$$2 \times 8 = 16$$



Zwei Aquarien

$$2 \times 8 = 16$$



2 Aquarien

8 Fische in jedem

2 Gruppen von Fischen

$$8 + 8 = 16$$

16 Fische insgesamt

Mathe 3

8



8



$$2 \times 8 = 16 \quad 8 \times 2 = 16$$

2




2




2



2




2



2



2



2

