



Lerne eine Mal-Reihe: 2 x 7

$$2 \times 7 = 14$$



Zwei Aquarien

$$2 \times 7 = 14$$



2 Aquarien

7 Fische in jedem

2 Gruppen von Fischen

$$7 + 7 = 14$$

14 Fische insgesamt

Mathe 3

7



7




$$2 \times 7 = 14 \quad 7 \times 2 = 14$$


2




2




2




2



2



2



2

