


# Lerne eine Mal-Reihe: 2 x 6

$$2 \times 6 = 12$$



Zwei Aquarien

$$2 \times 6 = 12$$



2 Aquarien

6 Fische in jedem

---

2 Gruppen von Fischen

$$6 + 6 = 12$$


12 Fische insgesamt

Mathe 3

6



6




$$2 \times 6 = 12 \quad 6 \times 2 = 12$$


2



2




2



2



2



2

