





Lerne eine Mal-Reihe: 2 x 2

$$2 \times 2 = 4$$



Zwei Aquarien

$$2 \times 2 = 4$$



2 Aquarien

2 Fische in jedem

2 Gruppen von Fischen

$$2 + 2 = 4$$

4 Fische insgesamt